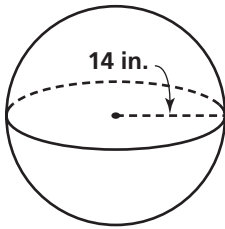


# Practice 11-6

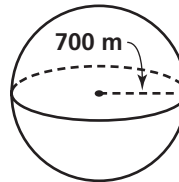
## Surface Areas and Volumes of Spheres

Find the surface area of each sphere. Round your answers to the nearest tenth.

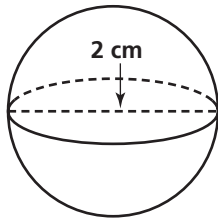
1. \_\_\_\_\_



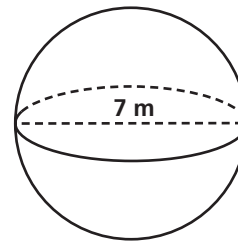
2. \_\_\_\_\_



3. \_\_\_\_\_

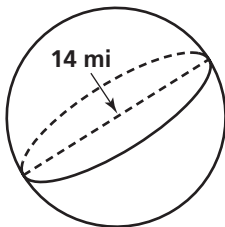


4. \_\_\_\_\_

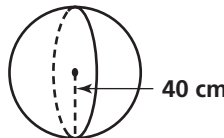


Find the volume of each sphere. Round your answers to the nearest tenth.

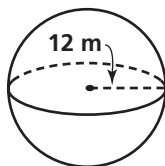
5. \_\_\_\_\_



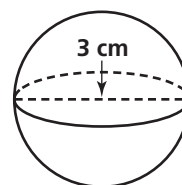
6. \_\_\_\_\_



7. \_\_\_\_\_



8. \_\_\_\_\_



Use the given circumference to approximate the volume of each object. Round your answers to the nearest whole number.

9. a volleyball with  $C = 69$  cm \_\_\_\_\_

10. a golf ball with  $C = 13.5$  cm \_\_\_\_\_

All rights reserved.

© Pearson Education, Inc., publishing as Pearson Prentice Hall.