

Practice 11-7

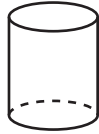
Areas and Volumes of Similar Solids

The figures in each pair are similar. Use the given information to find the similarity ratio of the smaller figure to the larger figure.

1. _____

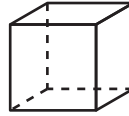


$$S.A. = 49 \text{ cm}^2$$

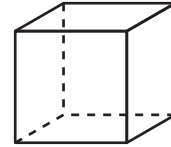


$$S.A. = 81 \text{ cm}^2$$

2. _____



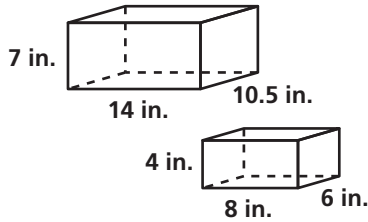
$$V = 125 \text{ in.}^3$$



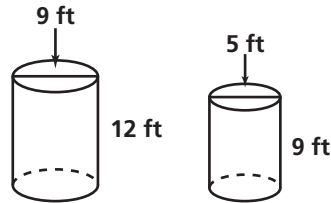
$$V = 512 \text{ in.}^3$$

Are the two solids in each pair similar? If so, give the similarity ratio. If not, write *not similar*.

3. _____



4. _____



The surface areas of two similar figures are given. The volume of the larger figure is given. Find the volume of the smaller figure.

5. _____

$$\begin{aligned} S.A. &= 25 \text{ cm}^2 \\ S.A. &= 36 \text{ cm}^2 \\ V &= 216 \text{ cm}^3 \end{aligned}$$

6. _____

$$\begin{aligned} S.A. &= 16 \text{ in.}^2 \\ S.A. &= 25 \text{ in.}^2 \\ V &= 500 \text{ in.}^3 \end{aligned}$$

The volumes of two similar figures are given. The surface area of the smaller figure is given. Find the surface area of the larger figure.

7. _____

$$\begin{aligned} V &= 8 \text{ ft}^3 \\ V &= 125 \text{ ft}^3 \\ S.A. &= 4 \text{ ft}^2 \end{aligned}$$

8. _____

$$\begin{aligned} V &= 125 \text{ cm}^3 \\ V &= 1000 \text{ cm}^3 \\ S.A. &= 150 \text{ cm}^2 \end{aligned}$$