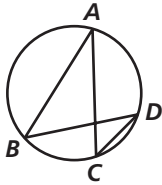


Practice 12-3

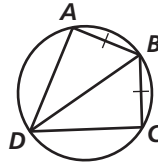
Inscribed Angles

For each diagram, indicate a pair of congruent inscribed angles.

1. _____

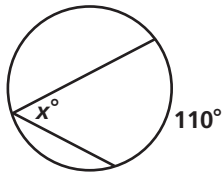


2. _____

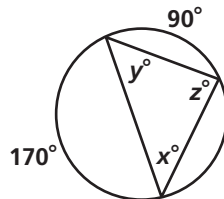


Find the value of each variable.

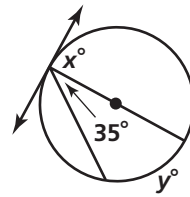
3. _____



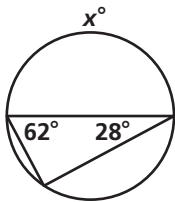
4. _____



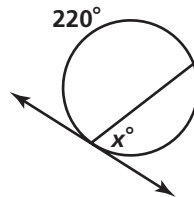
5. _____



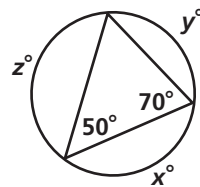
6. _____



7. _____



8. _____



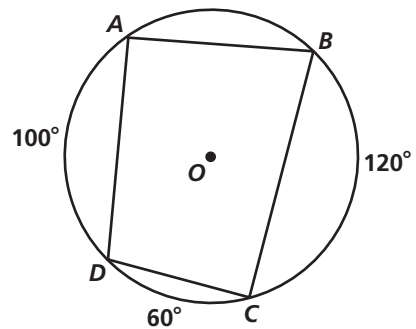
9. Find each indicated measure for $\odot O$.

a. $m\angle A$ _____

b. $m\angle B$ _____

c. $m\angle C$ _____

d. $m\angle D$ _____



All rights reserved.

© Pearson Education, Inc., publishing as Pearson Prentice Hall.