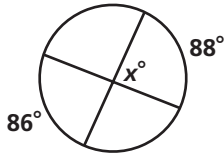


Practice 12-4

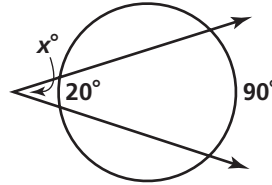
Angle Measures and Segment Lengths

Find the value of x .

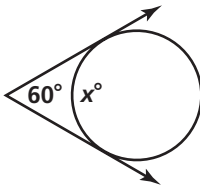
1. _____



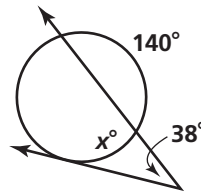
2. _____



3. _____

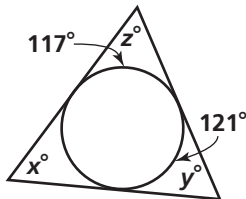


4. _____

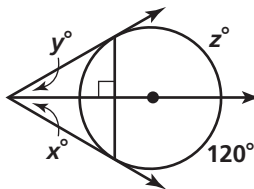


Algebra Find the value of each variable using the given chords, secants, and tangents. If your answer is not a whole number, round it to the nearest tenth.

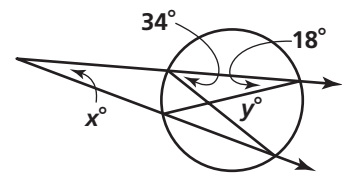
5. _____



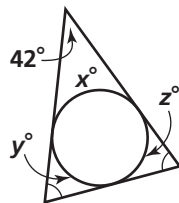
6. _____



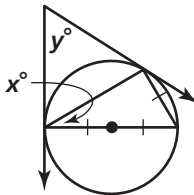
7. _____



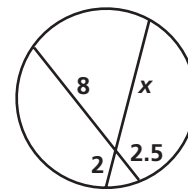
8. _____



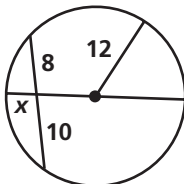
9. _____



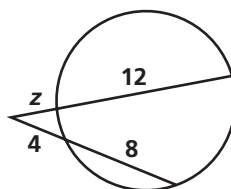
10. _____



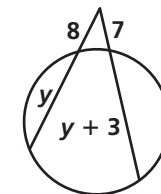
11. _____



12. _____



13. _____



All rights reserved.

© Pearson Education, Inc., publishing as Pearson Prentice Hall.